




Counting Exercises




___ lemonades + ___ cookies = ___ treats



___ lemonades + ___ cookies = ___ treats



___ lemonades + ___ cookies = ___ treats



___ lemonades + ___ cookies = ___ treats

Word Problems:

1. Abbey sold 15 cups of lemonade and her mom sold 20 cookiepops. How many treats in all? _____
2. Abbey started the day with 52 lemonade cups and by the end of the day, she had only 14. How many cups of lemonade did she sell today? _____